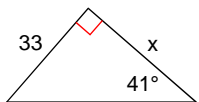


Trig - Find the missing side

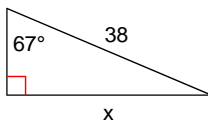
© 2013 Kuta Software LLC. All rights reserved.

Find the missing side. Round to the nearest tenth.

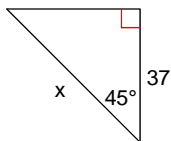
1)



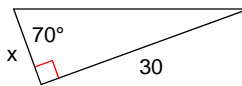
2)



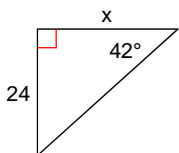
3)



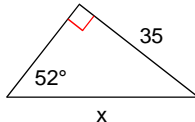
4)



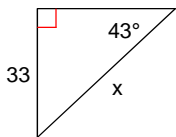
5)



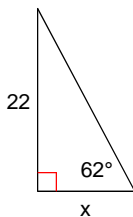
6)



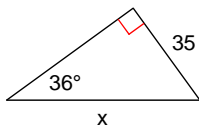
7)



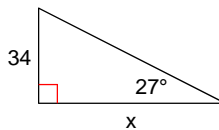
8)



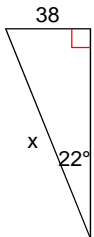
9)



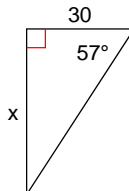
10)



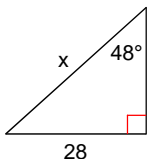
11)



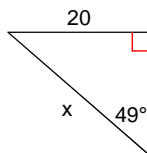
12)

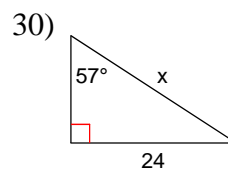
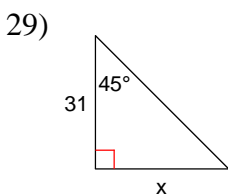
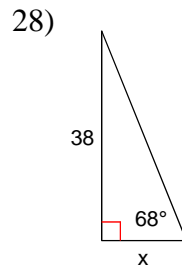
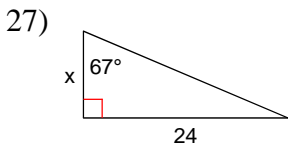
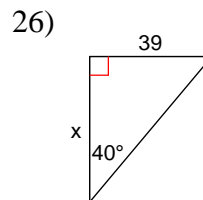
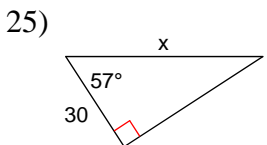
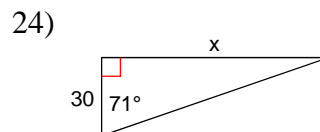
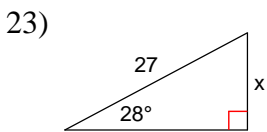
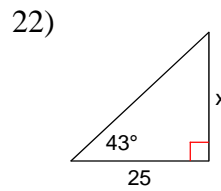
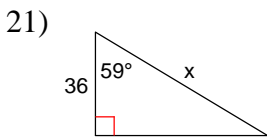
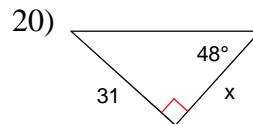
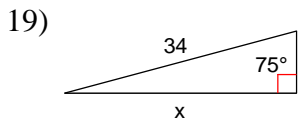
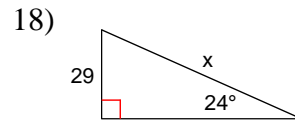
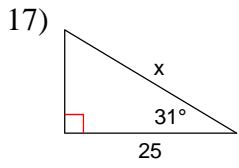
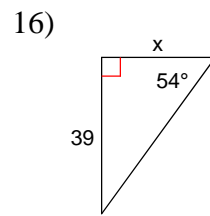
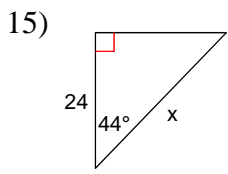


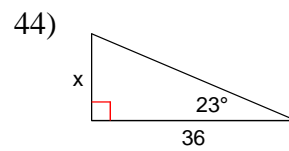
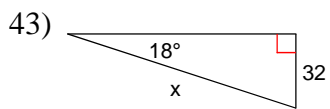
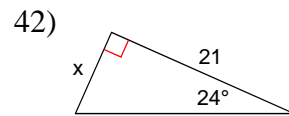
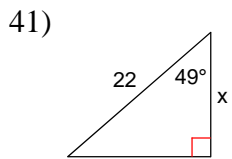
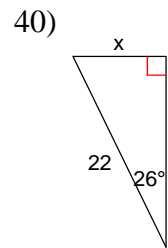
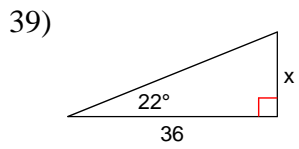
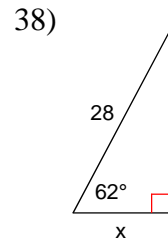
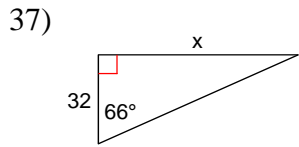
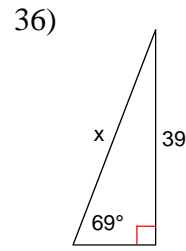
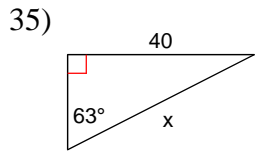
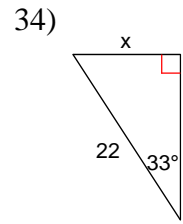
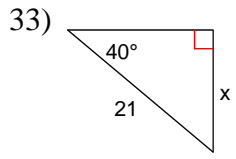
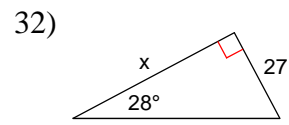
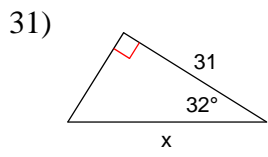
13)

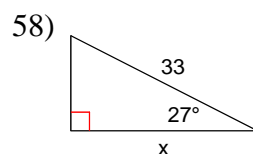
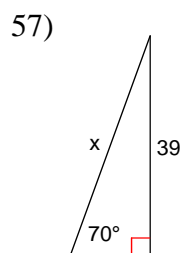
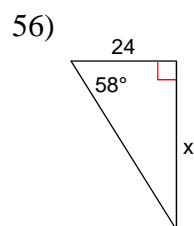
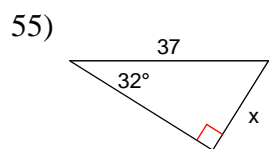
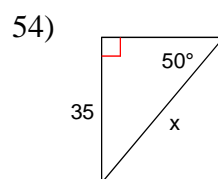
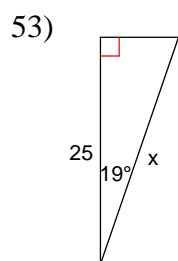
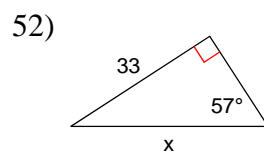
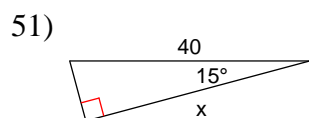
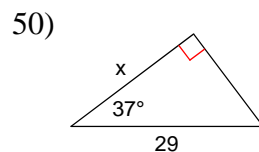
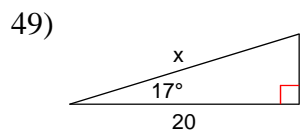
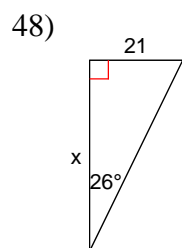
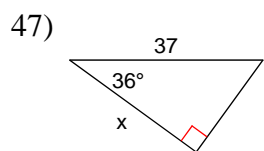
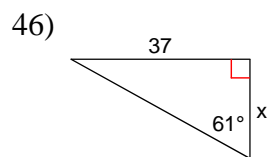
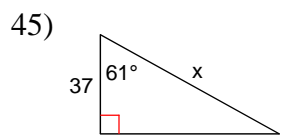


14)

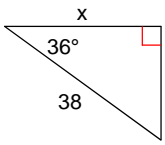




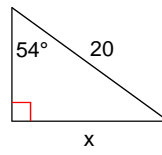




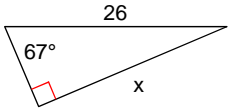
59)



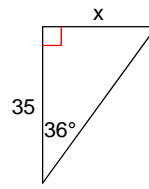
60)



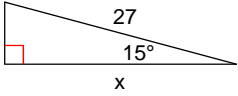
61)



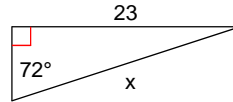
62)



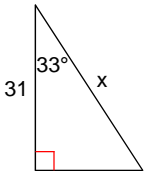
63)



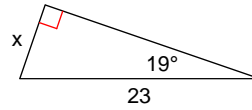
64)



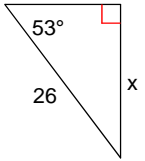
65)



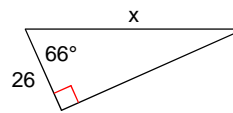
66)



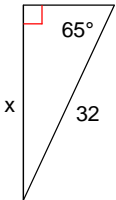
67)



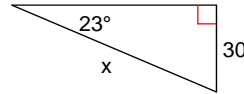
68)



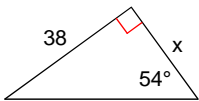
69)



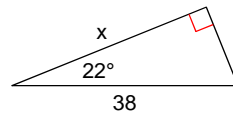
70)



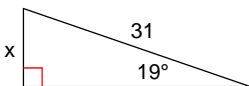
71)



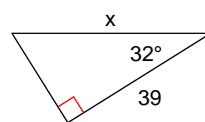
72)



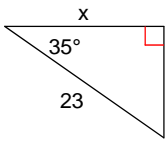
73)



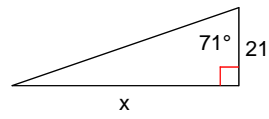
74)



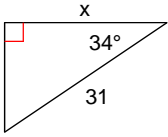
75)



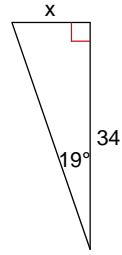
76)



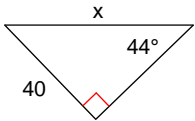
77)



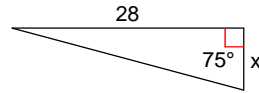
78)



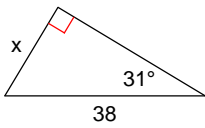
79)



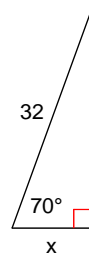
80)



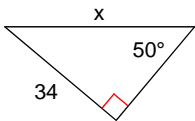
81)



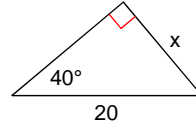
82)



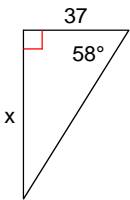
83)



84)



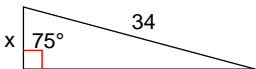
85)



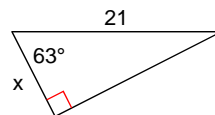
86)



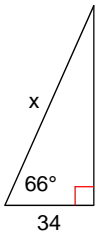
87)



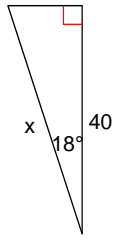
88)



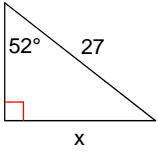
89)



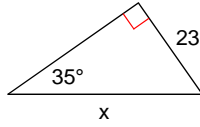
90)



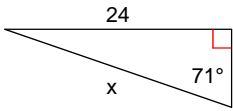
91)



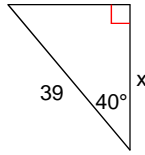
92)



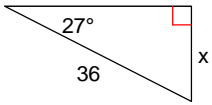
93)



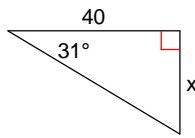
94)



95)



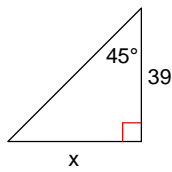
96)



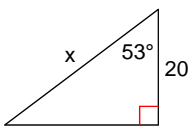
97)



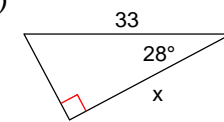
98)



99)



100)



Answers to Trig - Find the missing side (ID: 1)

- | | | | |
|----------|----------|-----------|-----------|
| 1) 38.0 | 2) 35.0 | 3) 52.3 | 4) 10.9 |
| 5) 26.7 | 6) 44.4 | 7) 48.4 | 8) 11.7 |
| 9) 59.5 | 10) 66.7 | 11) 101.4 | 12) 46.2 |
| 13) 37.7 | 14) 26.5 | 15) 33.4 | 16) 28.3 |
| 17) 29.2 | 18) 71.3 | 19) 32.8 | 20) 27.9 |
| 21) 69.9 | 22) 23.3 | 23) 12.7 | 24) 87.1 |
| 25) 55.1 | 26) 46.5 | 27) 10.2 | 28) 15.4 |
| 29) 31.0 | 30) 28.6 | 31) 36.6 | 32) 50.8 |
| 33) 13.5 | 34) 12.0 | 35) 44.9 | 36) 41.8 |
| 37) 71.9 | 38) 13.1 | 39) 14.5 | 40) 9.6 |
| 41) 14.4 | 42) 9.3 | 43) 103.6 | 44) 15.3 |
| 45) 76.3 | 46) 20.5 | 47) 29.9 | 48) 43.1 |
| 49) 20.9 | 50) 23.2 | 51) 38.6 | 52) 39.3 |
| 53) 26.4 | 54) 45.7 | 55) 19.6 | 56) 38.4 |
| 57) 41.5 | 58) 29.4 | 59) 30.7 | 60) 16.2 |
| 61) 23.9 | 62) 25.4 | 63) 26.1 | 64) 24.2 |
| 65) 37.0 | 66) 7.5 | 67) 20.8 | 68) 63.9 |
| 69) 29.0 | 70) 76.8 | 71) 27.6 | 72) 35.2 |
| 73) 10.1 | 74) 46.0 | 75) 18.8 | 76) 61.0 |
| 77) 25.7 | 78) 11.7 | 79) 57.6 | 80) 7.5 |
| 81) 19.6 | 82) 10.9 | 83) 44.4 | 84) 12.9 |
| 85) 59.2 | 86) 10.3 | 87) 8.8 | 88) 9.5 |
| 89) 83.6 | 90) 42.1 | 91) 21.3 | 92) 40.1 |
| 93) 25.4 | 94) 29.9 | 95) 16.3 | 96) 24.0 |
| 97) 24.1 | 98) 39.0 | 99) 33.2 | 100) 29.1 |